



**ALL SAINTS
CATHOLIC SCHOOL**
Growing Leaders in Mind, Body, and Spirit

Going into
Second Grade
Summer Coursework 2022
Math Skills

Name: _____

Date: _____

©2022TunstallandGrant

Skills Check: Count On

Count on and write the missing numbers in the series.

Score: _____

16, 17, _____, _____, _____, _____

34, 35, _____, _____, _____, _____

58, 59, _____, _____, _____, _____

70, 71, _____, _____, _____, _____

95, 96, _____, _____, _____, _____

22, 23, _____, _____, _____, _____

10, 11, _____, _____, _____, _____

67, 68, _____, _____, _____, _____

81, 82, _____, _____, _____, _____

105, 106, _____, _____, _____, _____

Name: _____

Date: _____

©2022TunstallandGrant

Skills Check: Count Back

Count back and write the missing numbers in the series. Score: _____

55, 54, _____, _____, _____, _____

28, 27, _____, _____, _____, _____

62, 61, _____, _____, _____, _____

76, 75, _____, _____, _____, _____

99, 98, _____, _____, _____, _____

21, 20, _____, _____, _____, _____

17, 16, _____, _____, _____, _____

63, 62, _____, _____, _____, _____

80, 79, _____, _____, _____, _____

115, 114, _____, _____, _____, _____

Name: _____

Date: _____

©2022TunstallandGrant

Skills Check: Standard Form

Write the numbers in standard form.

Score: _____

thirty-two

twenty-eight

twenty-five

sixty-four

fifty-one

seventy-three

ninety-two

fifty-four

eighty-six

twenty-three

eighteen

forty-two

Name: _____


Date: _____

©2022TunstallandGrant


Skills Check: Represent Numbers

Shade the hundred grid to model the number in the box. Score: _____


24




50




31




85




46




72




63




18




95




57



34



26



Name: _____

Date: _____
©2022TunstallandGrant

Skills Check: Number Forms

Write the number in expanded form and base ten.

Score: _____

38

expanded form

___tens ___ones

25

expanded form

___tens ___ones

42

expanded form

___tens ___ones

57

expanded form

___tens ___ones

19

expanded form

___tens ___ones

84

expanded form

___tens ___ones

90

expanded form

___tens ___ones

65

expanded form

___tens ___ones

76

expanded form

___tens ___ones

51

expanded form

___tens ___ones

92

expanded form

___tens ___ones

74

expanded form

___tens ___ones

Name: _____

Date: _____

©2022TunstallandGrant

Skills Check: Comparing Numbers

Write in the comparison symbol: $<$, $>$, or $=$ for each box.

Score: _____

2	4	12	6	9	10	15	18
14	19	17	5	12	18	13	15
15	20	11	19	15	11	20	8
7	2	17	12	4	1	16	18
5	17	3	9	10	8	0	20
2	14	19	14	8	10	9	16
12	19	20	6	5	4	13	17
6	1	12	8	7	11	14	20
18	10	17	0	3	1	0	11
9	7	11	8	20	10	1	15

Name: _____

Date: _____

©2022TunstallandGrant

Skills Check: Comparing Numbers

Write in the comparison symbol: $<$, $>$, or $=$ for each box.

Score: _____

52	64	82	56	29	40	65	78
94	89	87	85	32	38	93	75
50	50	19	91	25	15	27	78
37	72	15	12	34	43	56	65
35	82	65	26	78	80	22	20
27	44	19	34	15	55	39	36
52	49	28	36	47	44	56	57
25	25	90	80	51	35	85	70
79	80	15	51	75	74	26	36
65	67	81	8	90	93	100	100

Name: _____

Date: _____

©2022TunstallandGrant

Skills Check: Tens and Ones

Show the tens and ones by making a quick sketch.

Score: _____

14	30	51
25	86	62
43	78	95
47	53	21

Name: _____

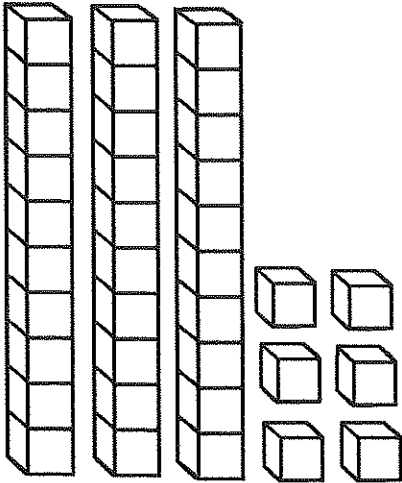
Date: _____

©2022TunstallandGrant

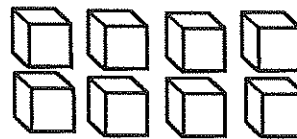
Skills Check: Base Ten

Write the tens and ones being modeled in base ten.

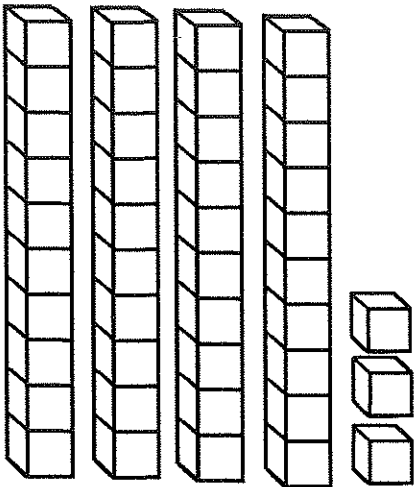
Score: _____



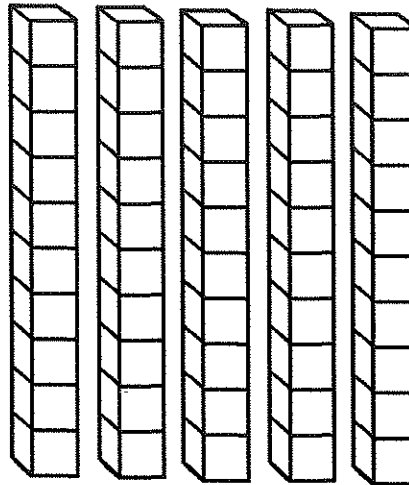
tens	ones



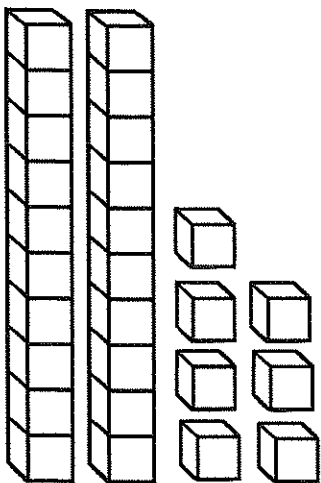
tens	ones



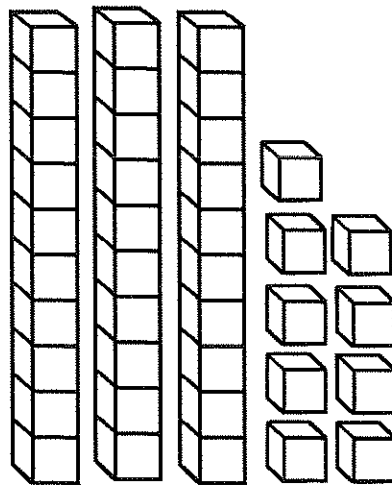
tens	ones



tens	ones



tens	ones



tens	ones

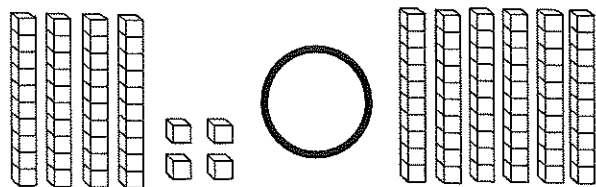
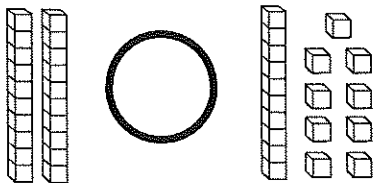
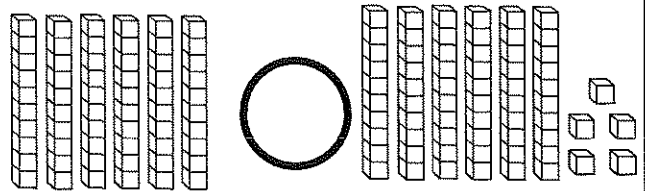
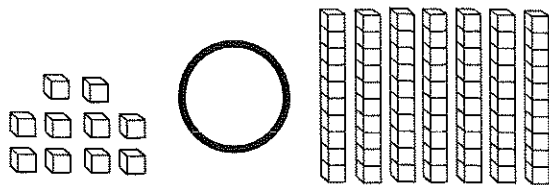
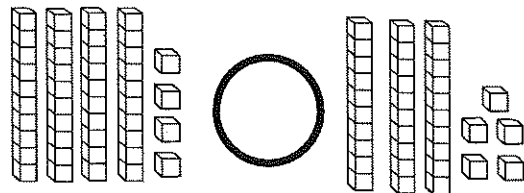
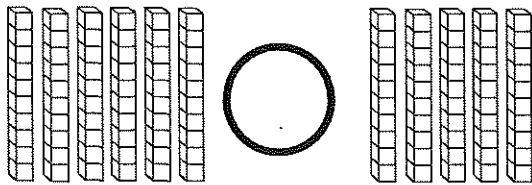
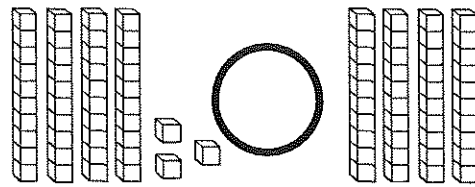
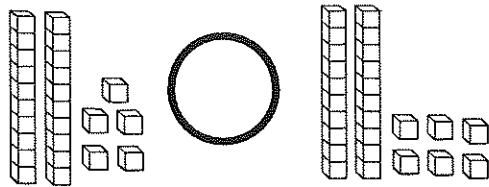
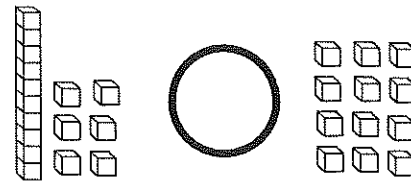
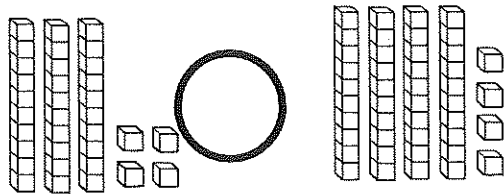
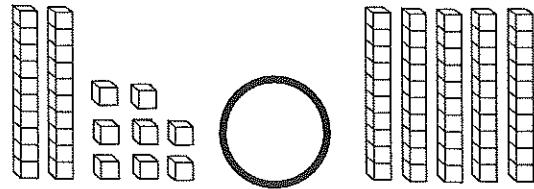
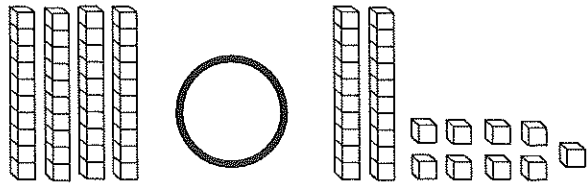
Name: _____

Date: _____

©2022TunstallandGrant

Skills Check: Compare Tens and Ones

Count the value on each side. Write $<$, $>$, or $=$ in the circle to compare. Score: _____



Name: _____

Date: _____

©2022TunstallandGrant

Skills Check: Ten More Ten Less One More One Less

Complete the number puzzles.

Score: _____

<table border="1"><tr><td></td><td></td><td></td></tr><tr><td></td><td>35</td><td></td></tr><tr><td></td><td></td><td></td></tr></table>					35					<table border="1"><tr><td></td><td></td><td></td></tr><tr><td></td><td>67</td><td></td></tr><tr><td></td><td></td><td></td></tr></table>					67					<table border="1"><tr><td></td><td></td><td></td></tr><tr><td></td><td>52</td><td></td></tr><tr><td></td><td></td><td></td></tr></table>					52				
	35																												
	67																												
	52																												
<table border="1"><tr><td></td><td></td><td></td></tr><tr><td></td><td>28</td><td></td></tr><tr><td></td><td></td><td></td></tr></table>					28					<table border="1"><tr><td></td><td></td><td></td></tr><tr><td></td><td>15</td><td></td></tr><tr><td></td><td></td><td></td></tr></table>					15					<table border="1"><tr><td></td><td></td><td></td></tr><tr><td></td><td>83</td><td></td></tr><tr><td></td><td></td><td></td></tr></table>					83				
	28																												
	15																												
	83																												
<table border="1"><tr><td></td><td></td><td></td></tr><tr><td></td><td>54</td><td></td></tr><tr><td></td><td></td><td></td></tr></table>					54					<table border="1"><tr><td></td><td></td><td></td></tr><tr><td></td><td>33</td><td></td></tr><tr><td></td><td></td><td></td></tr></table>					33					<table border="1"><tr><td></td><td></td><td></td></tr><tr><td></td><td>91</td><td></td></tr><tr><td></td><td></td><td></td></tr></table>					91				
	54																												
	33																												
	91																												
<table border="1"><tr><td></td><td></td><td></td></tr><tr><td></td><td>60</td><td></td></tr><tr><td></td><td></td><td></td></tr></table>					60					<table border="1"><tr><td></td><td></td><td></td></tr><tr><td></td><td>105</td><td></td></tr><tr><td></td><td></td><td></td></tr></table>					105					<table border="1"><tr><td></td><td></td><td></td></tr><tr><td></td><td>76</td><td></td></tr><tr><td></td><td></td><td></td></tr></table>					76				
	60																												
	105																												
	76																												

Name: _____

Date: _____

©2022TunstallandGrant

Skills Check: Ten More Ten Less

Fill in the numbers that are ten less and ten more than the given numbers. Score: _____

___ 36 ___

___ 62 ___

___ 23 ___

___ 45 ___

___ 28 ___

___ 99 ___

___ 50 ___

___ 14 ___

___ 41 ___

___ 24 ___

___ 95 ___

___ 52 ___

___ 71 ___

___ 37 ___

___ 11 ___

___ 85 ___

___ 46 ___

___ 39 ___

___ 106 ___

___ 80 ___

___ 25 ___

___ 19 ___

___ 53 ___

___ 70 ___

Name: _____

Date: _____


©2022TunstallandGrant

Skills Check: Word Problems 1


Write a number sentence and solve for each box.

Score: _____


Mom has some hats. She gave 7 to me. Now she has 11 hats left. How many hats did mom start with?



The recycle bin has some cans in it. I put 13 cans in the bin. Now it has 17 cans. How many were in the bin to start?




We had some candy in a dish. My brother took 4 pieces of candy. Now there are 13 pieces of candy in the dish. How many did we start with?



Grandma has pies on the table. We added 5 pies to the table. There are 11 pies total. How many did grandma have to start?



Some people were on the bus. 6 people got on the bus. Now there are 17 people on the bus. How many people were on the bus first?



My sister sang some songs. I asked her to sing three more songs. Now she sang 10 songs total. How many did she sing first?



Name: _____

Date: _____

©2022TunstallandGrant

Skills Check: Word Problems 2

Write a number sentence and solve for each box.

Score: _____

Dion has 7 pennies. Dre has 8 pennies. They put their pennies together. What is the total number of pennies?



Piper has green, pink, orange, and purple socks. She has 10 socks of each color. How many socks does she have?



The gym has 12 soccer balls and 6 basketballs. How many more soccer balls than basketballs?



The Trailblazers team scored 10 points. The Royals team scored 30 points. Then the Trailblazers team scored 20 more. What is the total of the points scored?




A pug and a poodle each have 4 bones. The Yorkie has 8. They put them together. How many total bones are there?



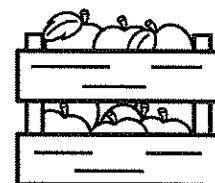
The drink machine sells 16 kinds of sodas. 5 sodas are all out. How many are sodas are not out?



At the party store, they blew up 12 balloons, then 9 more balloons. How many tens and ones make up the amount of balloons?



A farmer has 6 crates of oranges, 4 crates of apples, and 8 crates of peaches. How many crates does he have in all?



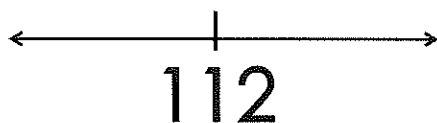
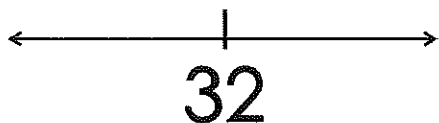
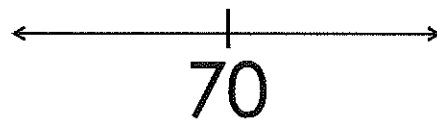
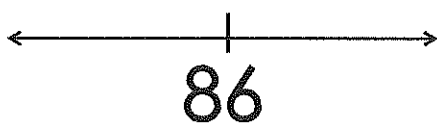
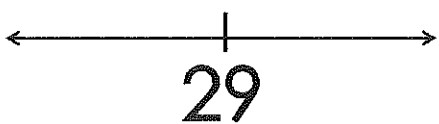
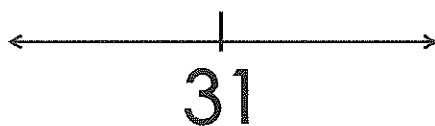
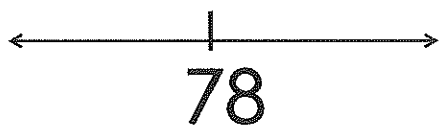
Name: _____

Date: _____

©2022TunstallandGrant

Skills Check: Number Line

Write a number that is greater and a number that is less on the number line. Score: _____



Name: _____

Date: _____

©2022TunstallandGrant

Skills Check: Order Numbers

Order the numbers on the number line from least to greatest. Score: _____

13 23 21

____, _____, _____

45 14 40

____, _____, _____

28 18 82

____, _____, _____

101 11 10

____, _____, _____

63 36 33

____, _____, _____

50 55 95

____, _____, _____

90 60 20

____, _____, _____

75 47 54

____, _____, _____

9 99 109

____, _____, _____

66 61 16

____, _____, _____

59 50 55

____, _____, _____

46 14 44

____, _____, _____

Name: _____

Date: _____

©2022TunstallandGrant

Skills Check: Add to 10

Add to find the sum.

Score: _____

$2 + 6 =$

$4 + 4 =$

$6 + 1 =$

$3 + 5 =$

$6 + 3 =$

$0 + 8 =$

$7 + 1 =$

$2 + 7 =$

$5 + 5 =$

$3 + 4 =$

$6 + 4 =$

$2 + 4 =$

$4 + 2 =$

$6 + 1 =$

$7 + 3 =$

$1 + 9 =$

$5 + 4 =$

$4 + 6 =$

Name: _____

Date: _____

©2022TunstallandGrant

Skills Check: Add to 20

Add to find the sum.

Score: _____

$3 + 9 =$

$9 + 8 =$

$6 + 5 =$

$8 + 5 =$

$2 + 13 =$

$10 + 8 =$

$7 + 5 =$

$8 + 6 =$

$2 + 16 =$

$9 + 3 =$

$6 + 4 =$

$11 + 4 =$

$4 + 12 =$

$7 + 7 =$

$5 + 13 =$

$11 + 9 =$

$10 + 5 =$

$4 + 15 =$

Name: _____

Date: _____

©2022TunstallandGrant

Skills Check: Subtract Within 10

Subtract to find the difference.

Score: _____

$9 - 6 =$

$7 - 4 =$

$6 - 1 =$

$8 - 5 =$

$6 - 3 =$

$10 - 8 =$

$7 - 1 =$

$9 - 6 =$

$5 - 5 =$

$9 - 4 =$

$8 - 3 =$

$6 - 4 =$

$7 - 2 =$

$6 - 1 =$

$8 - 5 =$

$10 - 9 =$

$5 - 4 =$

$6 - 4 =$

Name: _____

Date: _____

©2022TunstallandGrant

Skills Check: Subtract Within 20

Subtract to find the difference.

Score: _____

$13 - 9 =$

$19 - 8 =$

$16 - 5 =$

$18 - 5 =$

$12 - 6 =$

$11 - 8 =$

$17 - 5 =$

$18 - 6 =$

$12 - 5 =$

$19 - 3 =$

$16 - 4 =$

$11 - 4 =$

$14 - 8 =$

$17 - 7 =$

$15 - 6 =$

$11 - 9 =$

$16 - 5 =$

$14 - 6 =$

Name: _____













Date: _____

©2022TunstallandGrant

Skills Check: Decompose Within 20

Decompose the numbers into two parts.

Score: _____



Name: _____

Date: _____

©2022TunstallandGrant

Skills Check: Skip Count

Skip count and write the remaining numbers in the series. Score: _____

10, 20, _____, _____, _____, _____, _____

30, 40, _____, _____, _____, _____

60, 70, _____, _____, _____, _____

40, 50, _____, _____, _____, _____

0, 10, _____, _____, _____, _____, _____

20, 30, _____, _____, _____, _____

50, 60, _____, _____, _____, _____

70, 80, _____, _____, _____

100, 110, _____

Name: _____

Date: _____

©2022TunstallandGrant

Skills Check: Skip Count

Skip count and write the remaining numbers in the series. Score: _____

5, 10, 15, _____, _____, _____, _____

20, 25, 30, _____, _____, _____, _____

35, 40, 45, _____, _____, _____, _____

55, 60, 65, _____, _____, _____, _____

95, 100, 105, _____, _____, _____

25, 30, 35, _____, _____, _____, _____

40, 45, 50, _____, _____, _____, _____

60, 65, 70 _____, _____, _____, _____

85, 90, 95, _____, _____, _____, _____

105, 110, 115, _____

Name: _____

Date: _____

©2022TunstallandGrant

Skills Check: Skip Count

Skip count and write the remaining numbers in the series. Score: _____

2, 4, 6, _____, _____, _____, _____, _____

8, 10, 12, _____, _____, _____, _____

16, 18, 20, _____, _____, _____, _____

70, 72, 74 _____, _____, _____, _____

98, 100, 102, _____, _____, _____

26, 28, 30, _____, _____, _____, _____

14, 16, 18, _____, _____, _____, _____

66, 68, 70 _____, _____, _____, _____

80, 82, 84, _____, _____, _____, _____

106, 108, 110, _____, _____, _____

Name: _____

Date: _____

©2022TunstallandGrant

Skills Check: Balance Across the Equal Sign

Fill in the missing number to balance the equations.

Score: _____

$$7 - 6 = \underline{\quad} + 1$$

$$5 + \underline{\quad} = 8 - 3$$

$$4 + \underline{\quad} = 10 - 3$$

$$8 - 4 = \underline{\quad} + 2$$

$$9 - 3 = \underline{\quad} + 4$$

$$2 + \underline{\quad} = 8 - 2$$

$$5 + \underline{\quad} = 16 - 5$$

$$7 - 0 = \underline{\quad} + 5$$

$$12 - 5 = \underline{\quad} + 6$$

$$8 + \underline{\quad} = 10 - 1$$

$$3 + \underline{\quad} = 8 - 3$$

$$8 - 3 = \underline{\quad} + 2$$

$$10 - 2 = \underline{\quad} + 4$$

$$6 + \underline{\quad} = 10 - 3$$

Name: _____


Date: _____
©2022TunstallandGrant

Skills Check: Partition Shapes


Partition the shapes to match the given terms.

Score: _____


halves



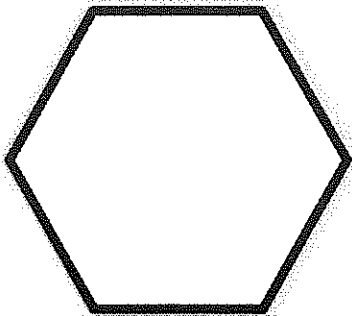
fourths




halves




fourths



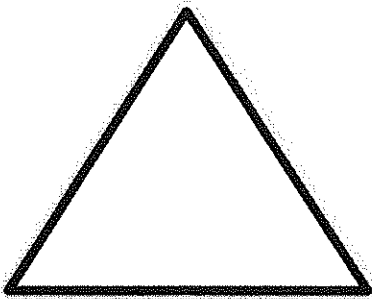
quarters



halves



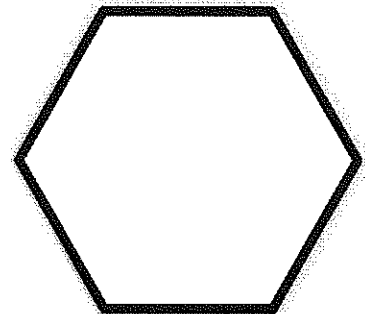
halves




fourths




halves




quarters



fourths



halves



Name: _____

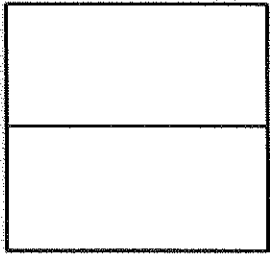
Date: _____

©2022TunstallandGrant

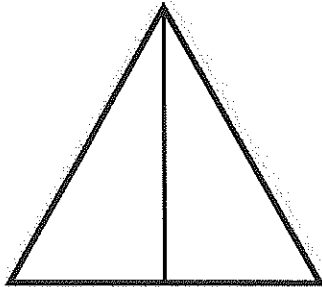
Skills Check: Identify Parts

Circle or highlight the correct parts for each model.

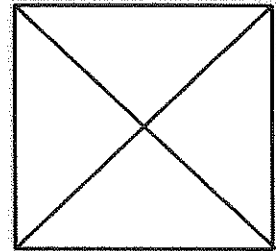
Score: _____



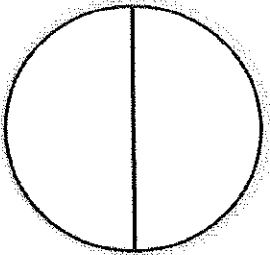
halves fourths




halves quarters



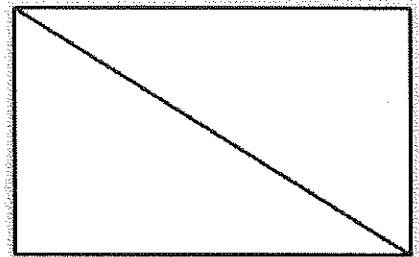
halves fourths




halves fourths




halves quarters



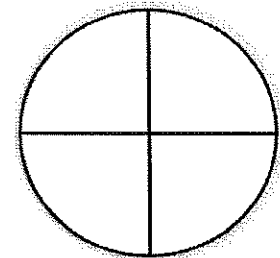
halves fourths




halves fourths




halves quarters




halves fourths



halves fourths



halves quarters



halves fourths

Name: _____

Date: _____


©2022TunstallandGrant

Skills Check: 2D Attributes

Fill in the correct information for each 2D shape.

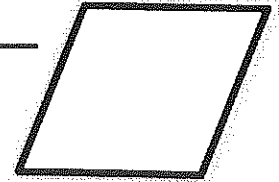
Score: _____

name _____



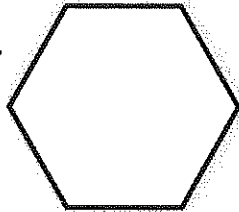
sides _____
vertices _____

name _____




sides _____
vertices _____

name _____



sides _____
vertices _____

name _____



sides _____
vertices _____

name _____



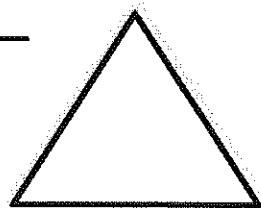
sides _____
vertices _____

name _____



sides _____
vertices _____

name _____



sides _____
vertices _____

Word Bank

circle
square
triangle
rhombus

rectangle
hexagon
trapezoid

Name: _____

Date: _____

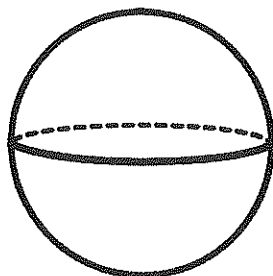
©2022TunstallandGrant

Skills Check: 3D Attributes

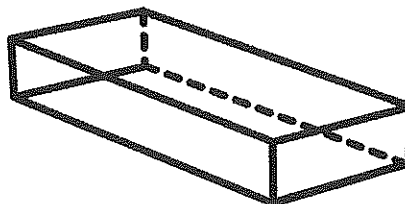
Fill in the correct name for each 3D figure.

Score: _____

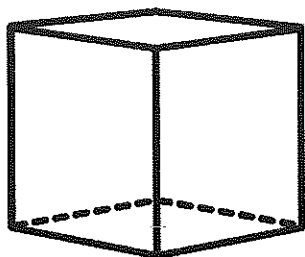
name _____



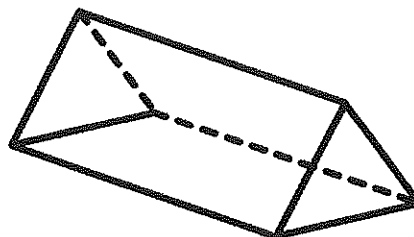
name _____



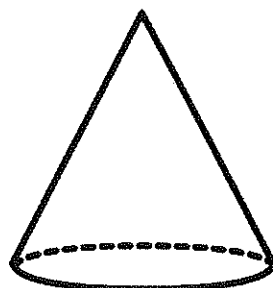
name _____



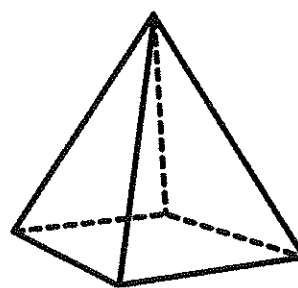
name _____




name _____



name _____



name _____



Word Bank

cylinder rectangular prism
cube triangular prism
pyramid cone
sphere

Name: _____

Date: _____


©2022TunstallandGrant

Skills Check: Height

Using the given cubes, measure the height of each item. Score: _____


The salt is

_____ cubes tall.




The key is

_____ cubes tall.



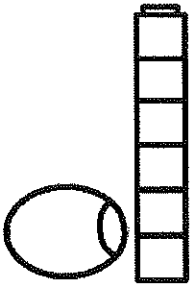
The egg is

_____ cubes tall.



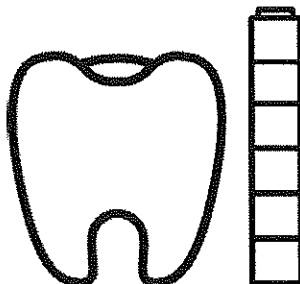
The bead is

_____ cubes tall.



The tooth is

_____ cubes tall.




The tomato is

_____ cubes tall.




The umbrella is

_____ cubes tall.



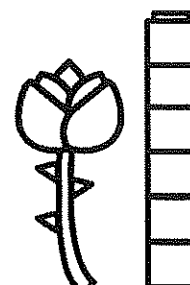
The ant is

_____ cubes tall.



The rose is

_____ cubes tall.



Name: _____

Date: _____

©2022Tunstall Grant

Skills Check: Length

Use the measurement tool provided by the teacher and measure each line to the nearest unit.

Score: _____



Name: _____

Date: _____

©2022TunstallandGrant

Skills Check: Measurement

Use the measurement tool provided by the teacher, draw a line the length of units given.

Score: _____

3 units



7 units



2 units



8 units



4 units



6 units



9 units



Name: _____


Date: _____

©2022TunstallandGrant


Skills Check: Time to the Hour

Draw the hands on the analog clocks to match the digital time.


Score: _____




4:00




7:00




1:00




2:00




10:00




8:00




5:00




12:00




3:00



9:00



6:00



11:00

Name: _____

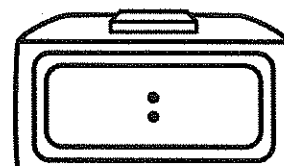

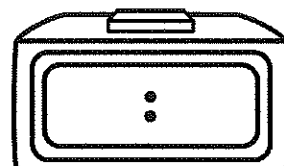

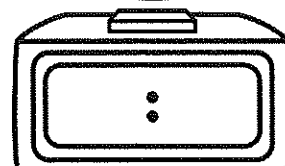

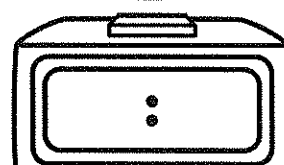

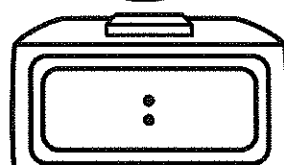

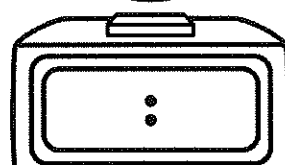

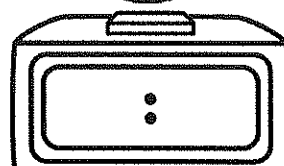

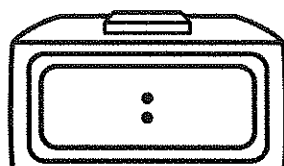

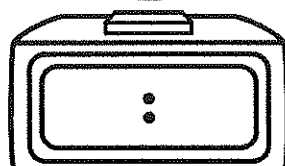

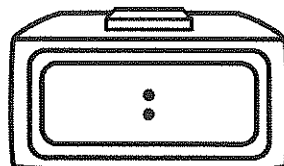

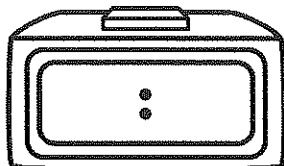

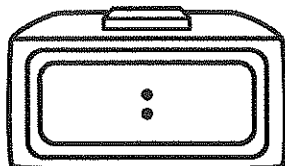

Date: _____

©2022TunstallandGrant

Skills Check: Time to the Hour

Write the digital time to match the analog clocks.

Score: _____



Name: _____


Date: _____

©2022TunstallandGrant


Skills Check: Half Hour

Draw the hands on the analog clocks to match the digital time.


Score: _____




6:30




2:30




11:30




1:30




12:30




6:30




9:30



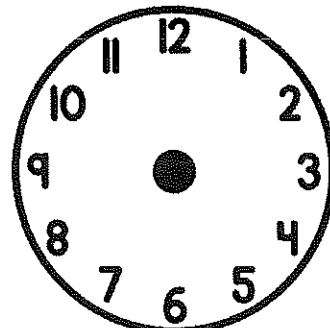
4:30




5:30



3:30



7:30



10:30

Name: _____





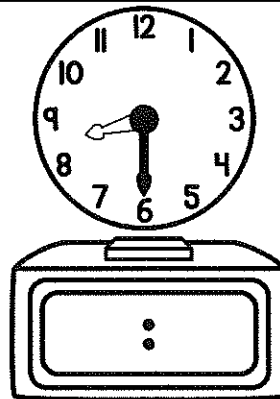


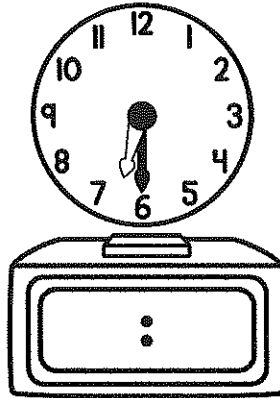
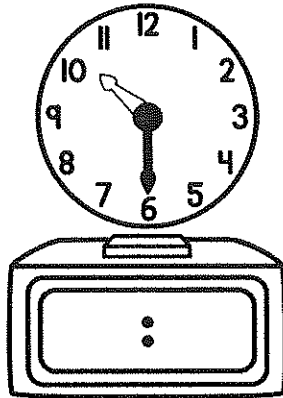



Date: _____

©2022TunstallandGrant

Skills Check: Half Hour

Write the digital time to match the analog clocks.

Score: _____



Name: _____









Date: _____
©2022TunstallandGrant

Skills Check: Graphing

Study the chart.

Score: _____

Make a tally chart and answer the questions.

Types of Fruit			
fruit	number		
	13		
	11		
	5		
	20		
		Key: Each tally equals 1 fruit	

1. Which type of fruit is there the most of?

2. How many bananas and oranges are there?

3. How many apples and strawberries are there?

4. Which type of fruit is there the least of?

5. How many more strawberries than oranges are there?

6. How many pieces of fruit are there altogether?




Name: _____


Date: _____
©2022TunstallandGrant

Skills Check: Bar Graph

Use the data in the table to create a bar graph about the cookies. Then answer the questions.

Score: _____

type of cookie	number of votes
 chocolate chip	14
 chocolate drop	9
 sugar	7



Which type of cookie do people like best? _____

Which type of cookie do people like least? _____

How many people like chocolate chip and sugar? _____

How many cookie votes are there in all? _____

Name: _____

Date: _____

©2022TunstallandGrant

Skills Check: Coins/Money

Identify the coin value, the name, and then count the set. Score: _____



_____ ¢





_____ ¢



_____ ¢





_____ ¢



_____ ¢





_____ ¢



_____ ¢





_____ ¢

Name: _____


Date: _____
©2022TunstallandGrant


Skills Check: Money Sets


Write the value of the set of coins.


Score: _____
































Name: _____


Date: _____

©2022TunstallandGrant

Skills Checks: Make Money

Draw a set of coins in the box to show the given amount.
The first box has been started for you.

Score: _____

8¢ 	15¢	21¢
35¢	43¢	50¢
81¢	55¢	39¢
67¢	75¢	99¢

Name: _____

Date: _____

©2022TunstallandGrant

Skills Check: Even or Odd

Circle the word even or odd for the number in the box. Score: _____

16 even odd	92 even odd	53 even odd
15 even odd	28 even odd	99 even odd
50 even odd	14 even odd	41 even odd
44 even odd	95 even odd	52 even odd
71 even odd	37 even odd	11 even odd
85 even odd	46 even odd	39 even odd
53 even odd	80 even odd	25 even odd
56 even odd	32 even odd	70 even odd

Name: _____

Date: _____

©2022TunstallandGrant

Skills Check: Add Tens

Add the tens and write the sum in the boxes.

Score: _____

$30 + 60 =$

$60 + 40 =$

$70 + 20 =$

$40 + 30 =$

$80 + 30 =$

$90 + 10 =$

$90 + 10 =$

$50 + 50 =$

$60 + 10 =$

$50 + 30 =$

$30 + 20 =$

$70 + 30 =$

$50 + 40 =$

$80 + 10 =$

Name: _____

Date: _____

©2022TunstallandGrant

Skills Check: Double-Digit Addition

Add to find the sum.

Score: _____

$$\begin{array}{r} 17 \\ + 10 \\ \hline \end{array}$$

$$\begin{array}{r} 73 \\ + 12 \\ \hline \end{array}$$

$$\begin{array}{r} 15 \\ + 34 \\ \hline \end{array}$$

$$\begin{array}{r} 54 \\ + 25 \\ \hline \end{array}$$

$$\begin{array}{r} 36 \\ + 43 \\ \hline \end{array}$$

$$\begin{array}{r} 50 \\ + 37 \\ \hline \end{array}$$

$$\begin{array}{r} 16 \\ + 32 \\ \hline \end{array}$$

$$\begin{array}{r} 35 \\ + 32 \\ \hline \end{array}$$

$$\begin{array}{r} 28 \\ + 31 \\ \hline \end{array}$$

$$\begin{array}{r} 55 \\ + 40 \\ \hline \end{array}$$

$$\begin{array}{r} 32 \\ + 40 \\ \hline \end{array}$$

$$\begin{array}{r} 51 \\ + 23 \\ \hline \end{array}$$

$$\begin{array}{r} 23 \\ + 13 \\ \hline \end{array}$$

$$\begin{array}{r} 45 \\ + 23 \\ \hline \end{array}$$

$$\begin{array}{r} 15 \\ + 24 \\ \hline \end{array}$$